

## Year 2 Homework Autumn 2

This half term our topic is **Animal Adventure!**

You should complete the expected tasks. These do not need to be returned to school.

### **Expected tasks;**

- **Reading** - daily reading at home is essential. Reading books and signed Reading Record Books must be brought to school **every day**.
- **Spelling** - a list is attached of the spellings to practise this half term.
- **Number skills** - a list is attached of number work to practise this half term.
- **Additional Learning** - in your child's Reading Record book there are all the logins for the learning websites we provide. These include TT Rockstars, Lexia (if your child accesses this), Mathletics and Developing Experts. Children can access these outside of school if they wish to.

### **Extra tasks;**

Your target is to complete at least **1** project from the extra task grids. This work must be returned to school no later than Wednesday 18th October 2023.

You will receive a sticker: **GOLD**, **SILVER** or **BRONZE** to take home.

Imagine you are visiting the North or South Pole. Write a postcard to your family telling them what it is like.




Create an animal out of recycled materials. You can use cardboard or fabric or anything you can find!



















Design a game for PE that includes moving like an animal. Jumping like a frog, slithering like a snake or hopping like a rabbit.



An idea of your own...



Please practise reading these real and nonsense words with your child.

few	shop	plug	sut 	blem 	brend 	meck 
fried	yell	sweep	yad 	drell 	throst 	shig 
beak	peel	soft	dop 	fusp 	stret 	joil 
cute	check	yards	uct 	quisk 	spraw 	chort 

These are our spellings for this half term.

Please practice spelling them and putting into sentences for understanding.

after

find

beautiful

gold

child

money

even

plant

Maths - Have a go at these arithmetic questions.

Show your working out by drawing your rods and dots.

1)  $7 - 5 =$

8)  $13 + 6 =$

2)  $14 - 3 =$

9)  $12 + 4 =$

3)  $27 - 4 =$

10)  $24 + 6 =$

4)  $46 - 5 =$

11)  $22 + 5 =$

5)  $78 - 10 =$

12)  $36 + 10 =$

6)  $49 - 20 =$

13)  $58 + 30 =$

7)  $99 - 70 =$

14)  $9 + 50 =$

Now have a go at these more *challenging* arithmetic questions.

Keep using your rods and dots to show your working out!

1)  $52 - 28 =$

9)  $52 - 28 =$

17)  $\underline{\quad} + 59 = 84$

2)  $97 - 29 =$

10)  $97 - 29 =$

18)  $39 + \underline{\quad} = 83$

3)  $43 + 29 =$

11)  $43 + 29 =$

19)  $75 + \underline{\quad} = 92$

4)  $38 + 25 =$

12)  $38 + 25 =$

20)  $\underline{\quad} + 44 = 65$

5)  $81 - 34 =$

13)  $81 - 34 =$

21)  $55 - \underline{\quad} = 22$

6)  $48 + 46 =$

14)  $48 + 46 =$

22)  $92 - \underline{\quad} = 38$

7)  $65 - 39 =$

15)  $65 - 39 =$

23)  $\underline{\quad} - 16 = 37$

8)  $32 - 18 =$

16)  $32 - 18 =$

24)  $\underline{\quad} + \underline{\quad} = 46$